

JR-KG

Second Term Exam - 2020

JR KG MATHS : 1/3

Date :

Day :

Sub : Fun with digits-II

Maths

Total Marks : 40

Time : 2 Hours

Name : Practice the Assignment Std: _____ Roll No. _____



Supervisor's Sign.



Que.No.	1	2	3	4	5	6	7	Total
Total Marks	05	10	05	05	05	07	03	40
Obtains Marks								

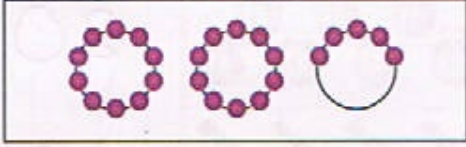

Examiner's Sign.

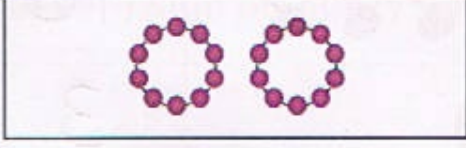

Q : 1 Count the objects and match the following.



[05]

1  

2  

3  




4  




5  

Options: 6, 30, 7, 25, 20

Q : 2. Addition

[10]

1  +  = 
5 + 8 = 13

2  +  = 
9 + 5 = 14

3		+		=	
	7		8		15
4		+		=	
	7		5		12
5		+		=	
	5		5		10


Q-3. Count the object and write down the number.

	20
	10
	3
	16
	28

Q-4. Write down in ascending - descending order.

25 26 27 28 29 30
50 49 48 47 46 45

Q-5. Write down the missing number.



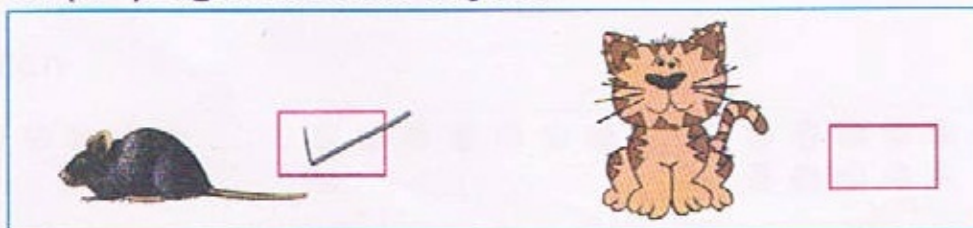
Q-6. Write down the number names.

4	Four	2	Two
6	Six	5	five
3	Three	10	Ten
7	Seven		

Q-7 (A) Put (✓) sign on heavy object.



(B) Put (✓) sign on small object.



(C) Put (✓) sign on more object.

