

Practice the Assignment

Second Term Exam - 2020

SR KG MATHS : 1/3

Date :

Day :

Sub : Fun with digits-III

Total Marks : 40

Time : 2 Hours

Name :

Maths

Std.: Sr.Kg Roll No.

Supervisor's Sign.

Que.No.	1	2	3	4	5	6	7	8	Total
Total Marks	05	10	05	03	03	03	06	05	40
Obtains Marks									

Examiner's Sign.

Q-1. Count the object and match the following.

(05)

1)

2)

3)

4)

5)


61
48
85
96
18


Q-2. Subtraction.


(10)

1)
$$\begin{array}{r} 7 \\ - 3 \\ \hline 4 \end{array}$$

2)
$$\begin{array}{r} 6 \\ - 4 \\ \hline 2 \end{array}$$

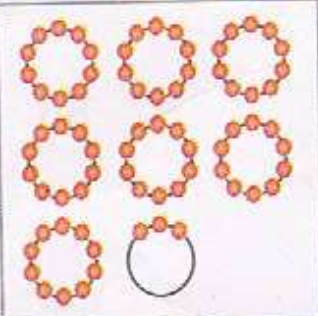
3)  $\begin{matrix} 2 \\ -1 \\ \hline 1 \end{matrix}$

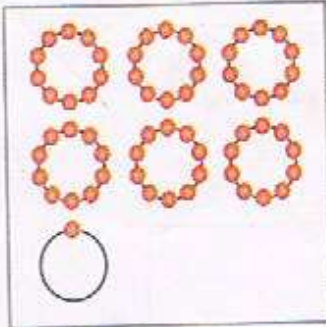
4)  $\begin{matrix} 9 \\ -2 \\ \hline 7 \end{matrix}$

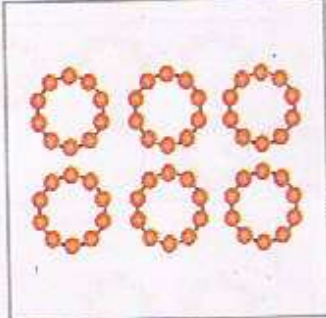
5)  $\begin{matrix} 5 \\ -4 \\ \hline 1 \end{matrix}$

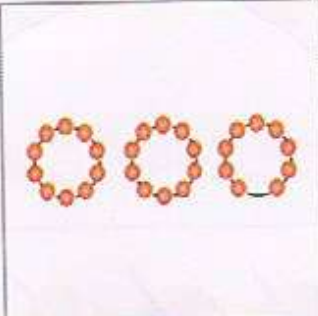
Q-3. Count the object and circle '○' on related number.

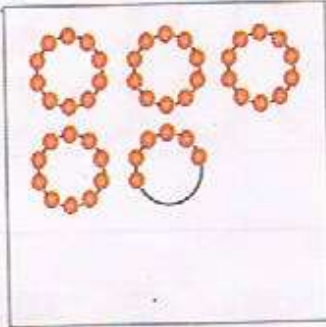
(05)

 $\begin{matrix} 67 & 72 & 73 \end{matrix}$

 $\begin{matrix} 61 & 71 & 80 \end{matrix}$

 $\begin{matrix} 40 & 60 & 20 \end{matrix}$

 $\begin{matrix} 42 & 60 & 29 \end{matrix}$

 $\begin{matrix} 46 & 78 & 54 \end{matrix}$

Q-4. Write down the after numbers.

(03)

38

65

69

Q-5. Write down the before numbers.

(03)

47 48

99 100

76 77

Q-6. Write down the between numbers.

(03)


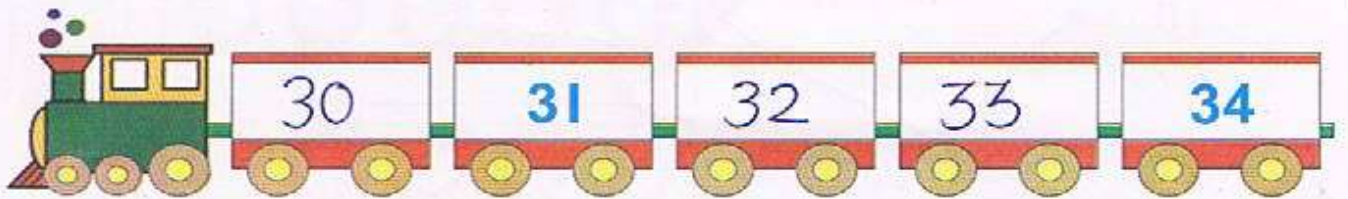
91 92 93

68 69 70

42 43 44

Q-7. Complete the given series.

(06)



Q-8. Write down the number names.

(05)

15 Fifteen

6 Six

10 Ten

2 Two

8 Eight

